

Je lis l'heure sur différents types d'horloges

Exercices

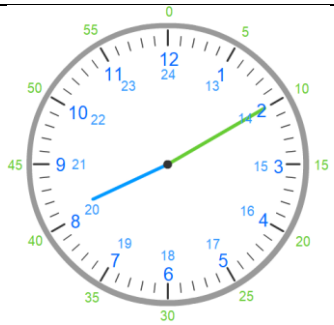
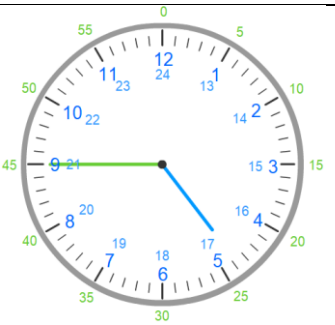
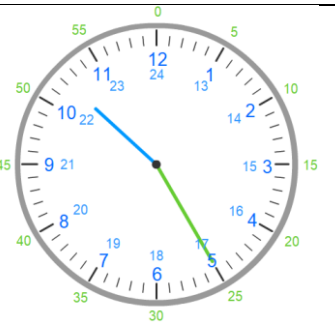
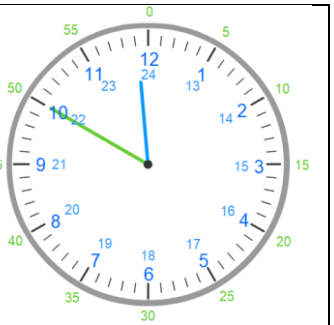
Lire l'heure

1 Convertis :

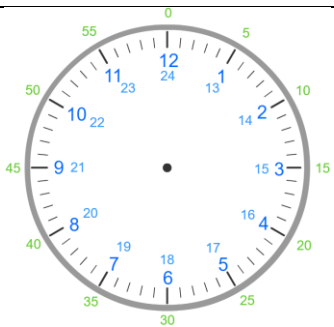
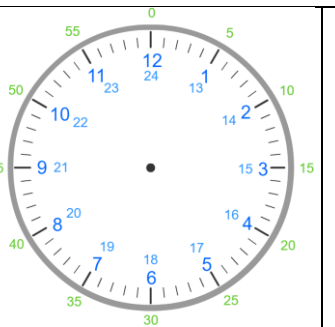
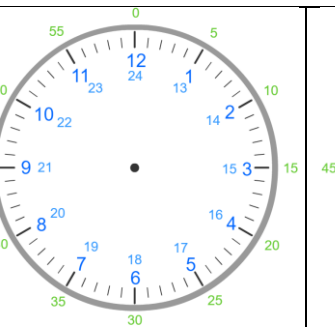
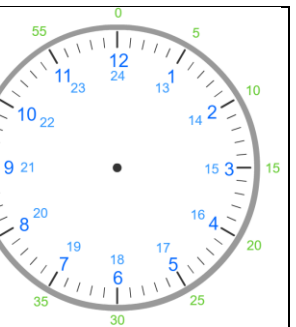
1 heure =minutes.

1 minute =secondes.

2 Ecris les heures du matin et de l'après-midi sous chaque horloge.

| | | | |
|--|--|---|--|
|  |  |  |  |
| <input type="text"/> | <input type="text"/> | <input type="text"/> | <input type="text"/> |
| <input type="text"/> | <input type="text"/> | <input type="text"/> | <input type="text"/> |

3 Dessine les aiguilles (en bleu pour les heures, en vert pour les minutes).

| | | | |
|--|---|--|--|
|  <p>18h30</p> |  <p>3h40</p> |  <p>7h15</p> |  <p>21h</p> |
|--|---|--|--|